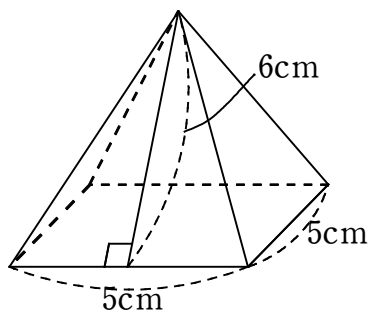


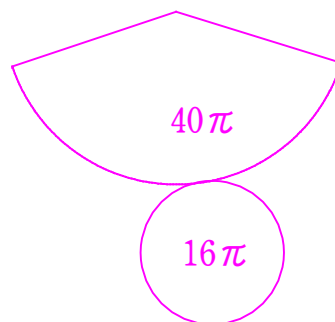
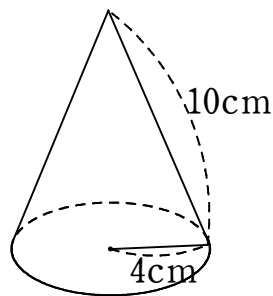
1 次の立体の表面積を求めなさい。

(1) 正四角錐



$$85 \text{ cm}^2$$

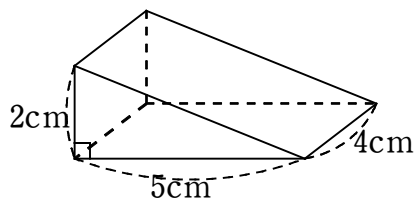
(2) 円錐



$$56\pi \text{ cm}^2$$

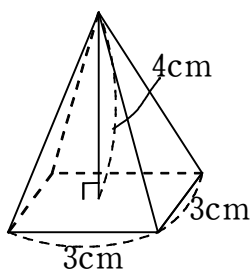
2 次の立体の体積を求めなさい。

(1) 三角柱



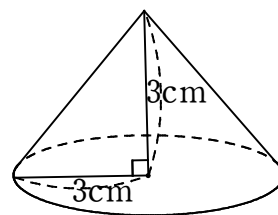
$$20 \text{ cm}^3$$

(2) 正四角錐



$$12 \text{ cm}^3$$

(3) 円錐



$$9\pi \text{ cm}^3$$